

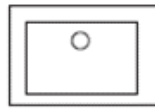
Building Drawings—Questions

1. Architects use British Standards Institution (BSI) symbols to represent features on their drawings.

State what each of the symbols shown below represent:



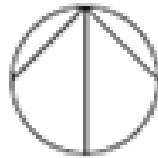
a. _____



b. _____



c. _____



d. _____



e. _____

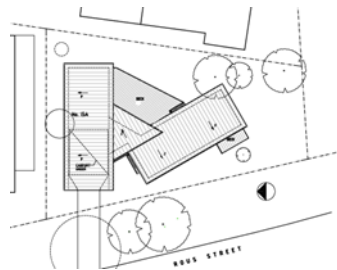
2. Plans are used by architects to show different features and details.

State the name AND purpose of each plan:



Plan _____

Purpose



Plan _____

Purpose



Plan _____

Purpose

3. Study the building drawing opposite.

Identify the symbols A-E on the Floor Plan of the Kitchen.

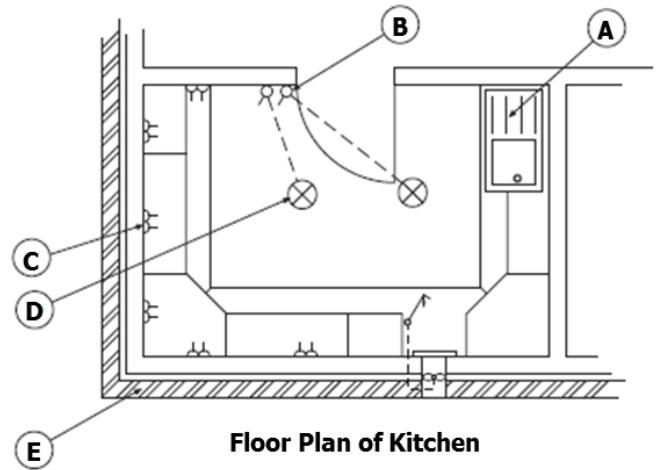
A _____

B _____

C _____

D _____

E _____



4. Identify the symbols F-H on the Floor Plan of the Bathroom.

F _____

G _____

H _____

